

What you'll Learn About

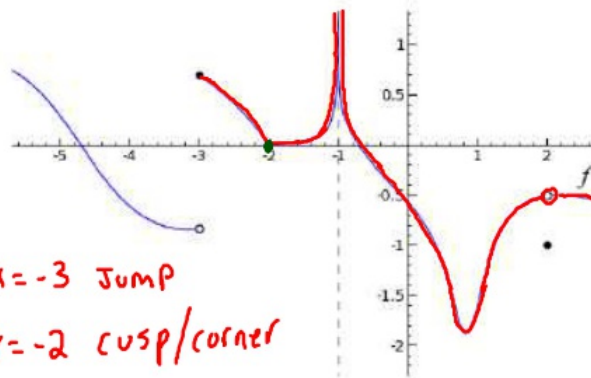
- How the derivative might fail to exist
- Differentiability implies local linearity
- Differentiability implies Continuity

continuous
has a slope
you can draw
a tangent
line

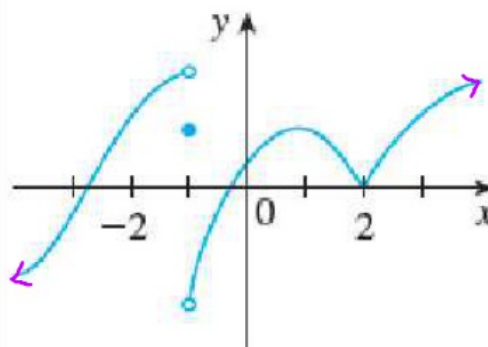
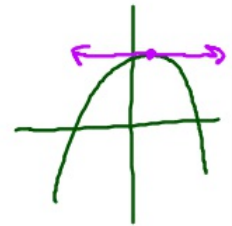
$(-\infty, -3) \cup (-3, -2) \cup (-2, -1) \cup (-1, 2) \cup (2, \infty)$

- a. Find all points where the function, $f(x)$, is differentiable.
 b. Find all points where the function is continuous, but not differentiable.
 c. Find all points where the graph is neither continuous nor differentiable.

$x = -2$
 $x = 2, x = -1, x = -3$



$x = -3$ Jump
 $x = -2$ cusp/corner
 $x = -1$ VA
 $x = 2$ Hole

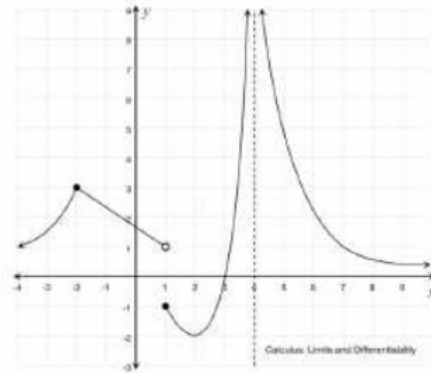


$x = -1$ not continuous
not differentiable

$x = 2$ continuous
not differentiable

3.2 Differentiability:

- Find all points where the function, $f(x)$, is differentiable.
- Find all points where the function is continuous, but not differentiable.
- Find all points where the graph is neither continuous nor differentiable.



$$\lim_{x \rightarrow 0} \frac{f(x) - f(a)}{x - a}$$

